

PAPER

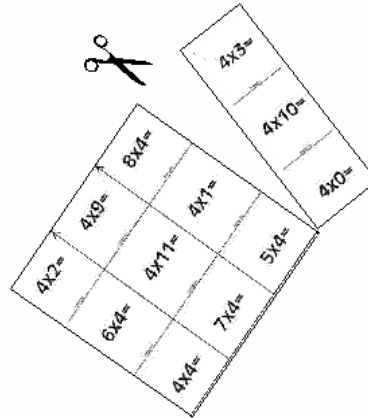
TOWER

Stacking game

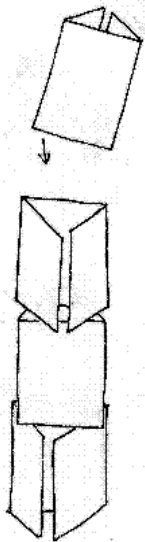
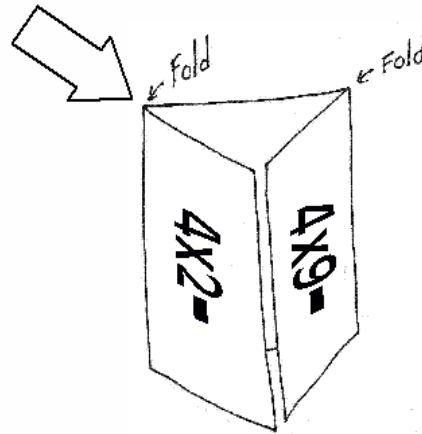
Practice your
ADDITION
MATH FACTS

Directions:

One: Cut out the Paper Tower cards along the solid lines.

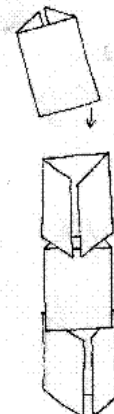


Two: Fold each card into a triangle, along the dotted lines.



Don't let the tower Fall down!

Three: Players take turns first answering the equations on a card, then stacking the card on top of the previous card, as shown. The player who stacks a card and makes the tower Fall down, loses.



Play this game with a partner

$2+2=$

Folding line

$2+9=$

Folding line

$8+2=$

Folding line

$2+3=$

Folding line

$6+2=$

Folding line

$2+11=$

Folding line

$2+1=$

Folding line

$2+10=$

Folding line

$2+4=$

$7+2=$

$5+2=$

$2+0=$



$3+2=$

Folding line



$3+9=$

Folding line



$8+3=$

Folding line



$3+3=$

Folding line

$6+3=$

Folding line

$3+11=$

Folding line

$3+1=$

Folding line

$3+10=$

Folding line

$3+4=$

$7+3=$

$5+3=$

$3+0=$

$4+2=$

Folding line

$4+9=$

Folding line

$8+4=$

Folding line

$4+3=$

Folding line

$6+4=$

Folding line

$4+11=$

Folding line

$4+1=$

Folding line

$4+10=$

Folding line

$4+4=$

$7+4=$

$5+4=$

$4+0=$



$5+2=$

Folding line

$5+9=$

Folding line

$8+5=$

Folding line

$5+3=$

Folding line

$6+5=$

Folding line

$5+11=$

Folding line

$5+1=$

Folding line

$5+10=$

Folding line

$5+4=$

$7+5=$

$5+5=$

$5+0=$



$6+2=$

Folding line

$6+9=$

Folding line

$8+6=$

Folding line

$6+3=$

Folding line

$6+6=$

Folding line

$6+11=$

Folding line

$6+1=$

Folding line

$6+10=$

Folding line

$6+4=$

$7+6=$

$6+5=$

$6+0=$



$7+2=$

Folding line



$7+9=$

Folding line



$8+7=$

Folding line



$7+3=$

Folding line

$7+6=$

Folding line

$7+11=$

Folding line

$7+1=$

Folding line

$7+10=$

Folding line

$7+4=$

$7+7=$

$7+5=$

$7+0=$

$8+2=$

Folding line

$8+9=$

Folding line

$8+8=$

Folding line

$8+3=$

Folding line

$8+6=$

Folding line

$8+11=$

Folding line

$8+1=$

Folding line

$8+10=$

Folding line

$8+4=$

$8+7=$

$8+5=$

$8+0=$



$9+2=$

Folding line

$9+9=$

Folding line

$9+8=$

Folding line

$9+3=$

Folding line

$9+6=$

Folding line

$9+11=$

Folding line

$9+1=$

Folding line

$9+10=$

Folding line

$9+4=$

$9+7=$

$9+5=$

$9+0=$

